

Solve each problem.


Answers

1) At the fair Janet spent \$7.00 buying fair food. She gave the cashier a twenty dollar bill. How much change should she get back?



- 1. _____
- 2. _____
- 3. _____

2) At the book fair Cody spent \$5.77 buying books. He gave the cashier a ten dollar bill. How much change should he get back?



3) Mike spent \$10.74 buying some new toys. He bought them using a twenty dollar bill. How much change should he get back?






Solve each problem.


1) At the fair Janet spent \$7.00 buying fair food. She gave the cashier a twenty dollar bill. How much change should she get back?



2) At the book fair Cody spent \$5.77 buying books. He gave the cashier a ten dollar bill. How much change should he get back?



3) Mike spent \$10.74 buying some new toys. He bought them using a twenty dollar bill. How much change should he get back?



Answers

1. **B**

2. **C**

3. **C**